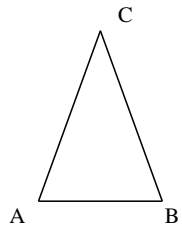


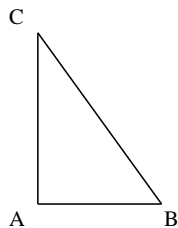
Classificazione dei triangoli in base ai lati- Scheda allievo

		a	b	c	d	e	f	g	h	i	l	m	n
LATI	AB	12	8	11	8	1,4	13	12	14	14	10	16	8
	BC	7	6	4	5	1,3	8	12	6	8	10	18	6
	CA	6	10	7	12	1,5	4	12	6	8	6	20	10
Esiste?													
Scala	disegno	1:1	1:1	1:1	1:1	1:1	1:2	1:2	1:2	1:2	1:2	1:2	1:2
Rettangolo	Sì/No												
Come si	chiama?												

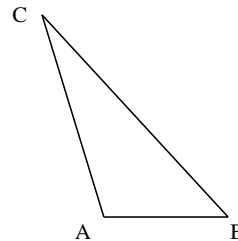
Classifica in base ai lati e agli angoli i triangoli seguenti (AB, BC e CD sono lati del triangolo ABC).



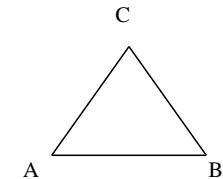
.....



.....



.....



.....